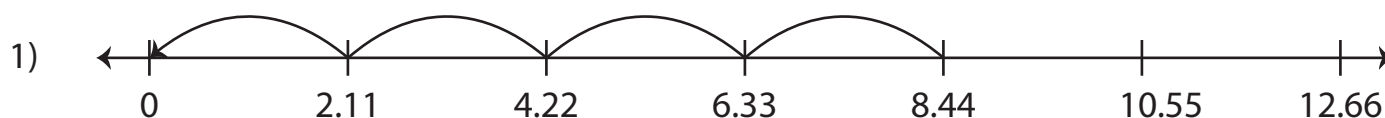


# Dividing Decimals Using Number Lines

Complete the division sentence that describes each model.



$$\underline{\hspace{2cm}} \div 2.11 = 4$$



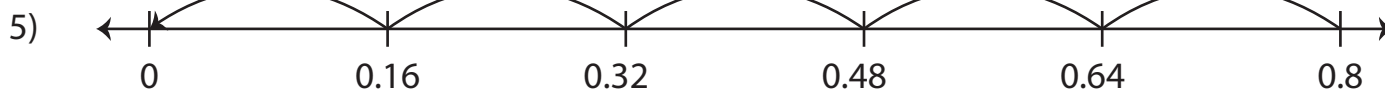
3)

# Preview

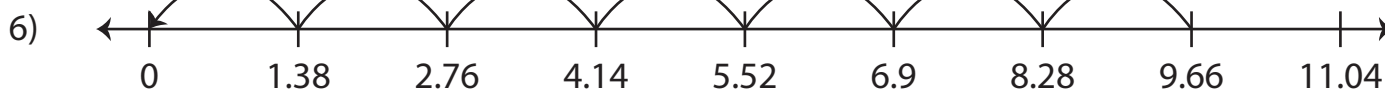
Become a member to unlock  
unrestricted access to both printable  
and online worksheets.



[www.tutoringhour.com](http://www.tutoringhour.com)



$$\underline{\hspace{2cm}} \div 0.16 = 5$$



$$9.66 \div \underline{\hspace{2cm}} = 7$$