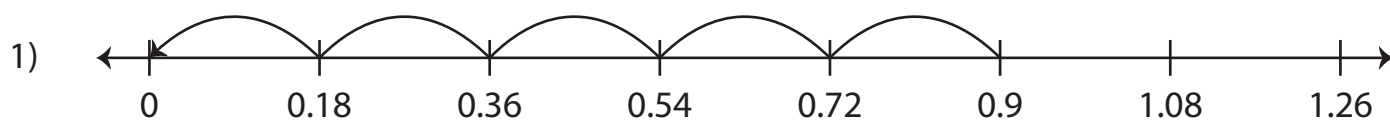


Dividing Decimals Using Number Lines

Complete the division sentence that describes each model.



$$0.9 \div \underline{\hspace{2cm}} = 5$$

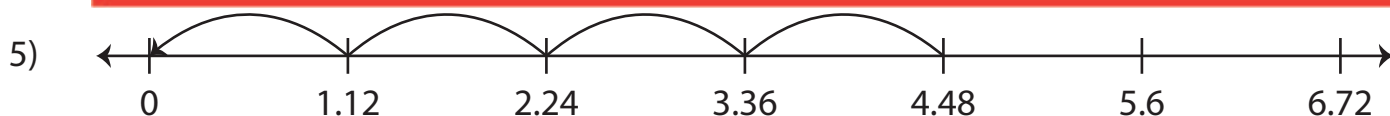


Preview

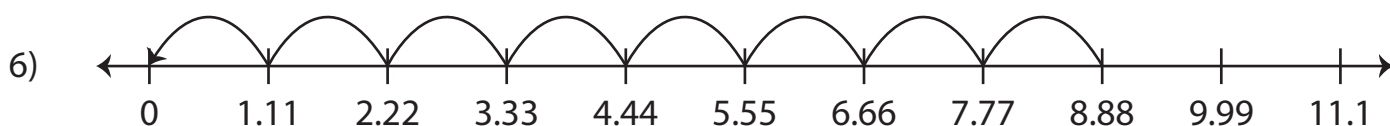
Become a member to unlock
unrestricted access to both printable
and online worksheets.



www.tutoringhour.com



$$4.48 \div \underline{\hspace{2cm}} = 4$$



$$\underline{\hspace{2cm}} \div 1.11 = 8$$