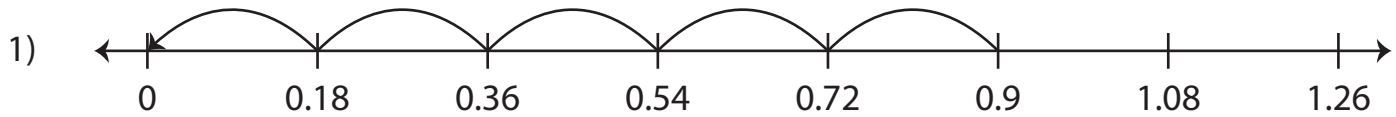
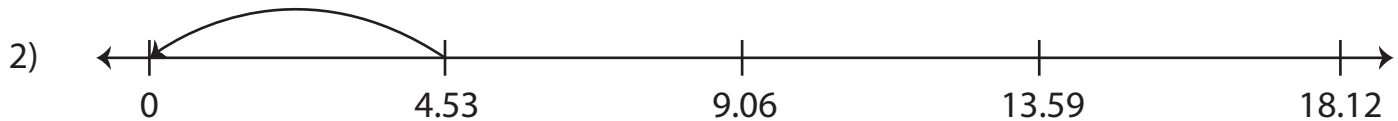


Dividing Decimals Using Number Lines

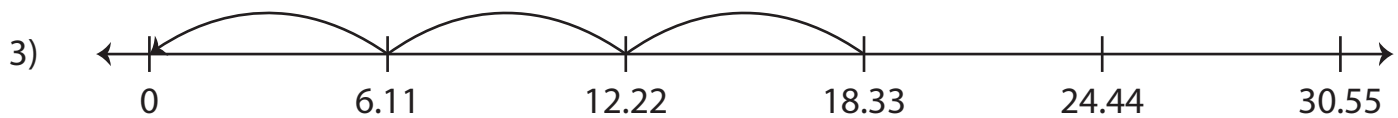
Complete the division sentence that describes each model.



$$0.9 \div \underline{\quad\quad\quad} = 5$$



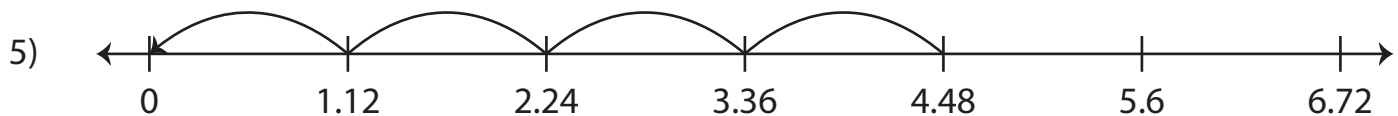
$$\underline{\quad\quad\quad} \div 4.53 = 1$$



$$18.33 \div \underline{\quad\quad\quad} = 3$$



$$\underline{\quad\quad\quad} \div 0.74 = 10$$



$$4.48 \div \underline{\quad\quad\quad} = 4$$



$$\underline{\quad\quad\quad} \div 1.11 = 8$$