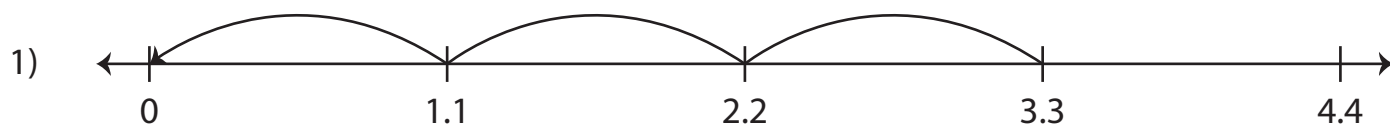
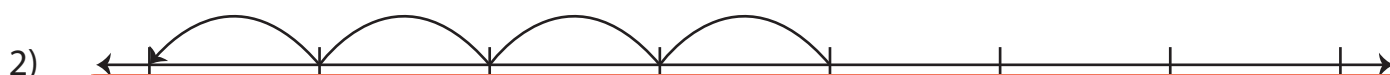


Dividing Decimals Using Number Lines

Complete the multiplication sentence that describes each model.



$$3.3 \div \underline{\quad\quad\quad} = 3$$



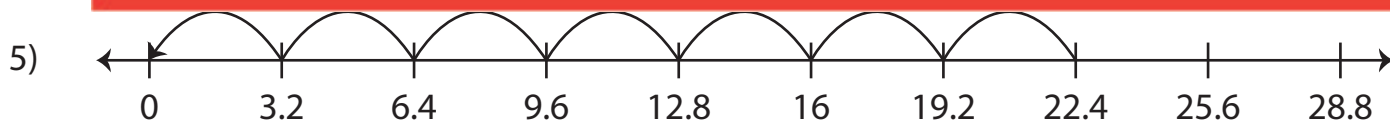
3)

Preview


Become a member to unlock
unrestricted access to both printable
and online worksheets.



www.tutoringhour.com



$$22.4 \div \underline{\quad\quad\quad} = 7$$



$$\underline{\quad\quad\quad} \div 9.4 = 2$$