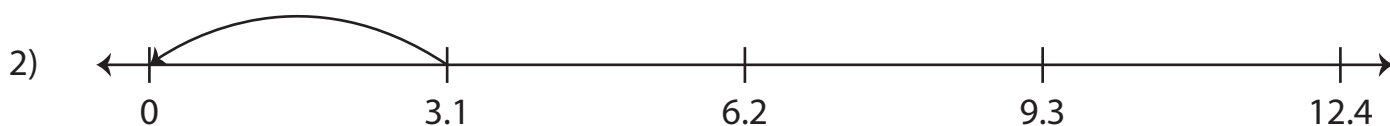


Dividing Decimals Using Number Lines

Complete the multiplication sentence that describes each model.



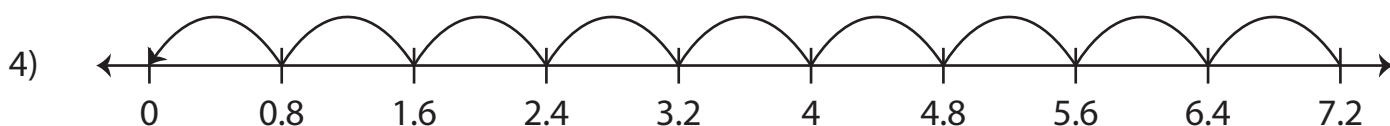
$$\underline{\hspace{2cm}} \div 6.3 = 4$$



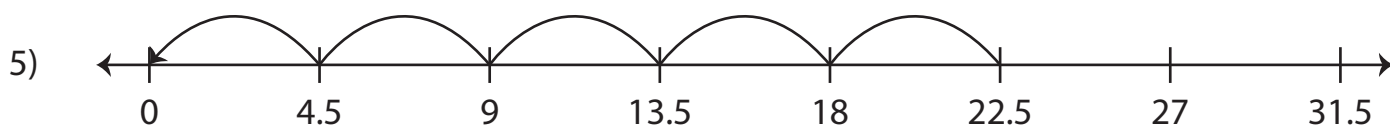
$$3.1 \div \underline{\hspace{2cm}} = 1$$



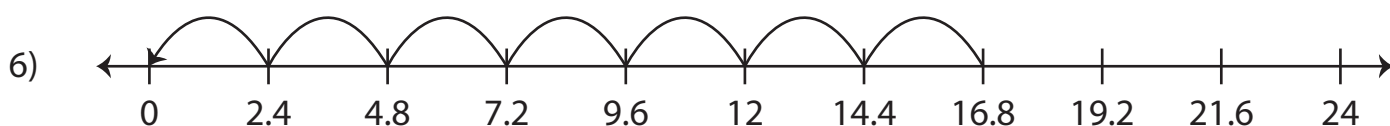
$$\underline{\hspace{2cm}} \div 7.2 = 2$$



$$7.2 \div \underline{\hspace{2cm}} = 9$$



$$\underline{\hspace{2cm}} \div 4.5 = 5$$



$$16.8 \div \underline{\hspace{2cm}} = 7$$