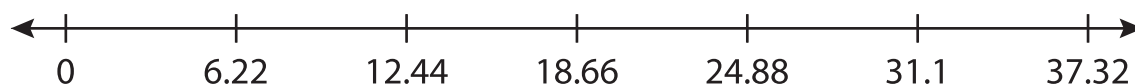


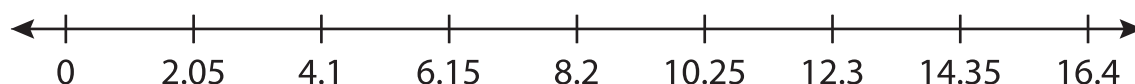
Multiplying Decimals Using Number Lines

Draw hops on each number line and complete the multiplication sentence.

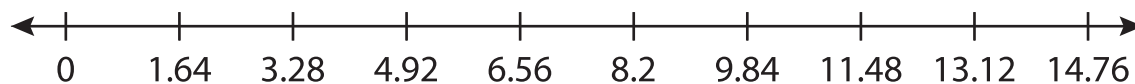
1) $6.22 \times 3 = \underline{\hspace{2cm}}$




2) $2.05 \times 5 = \underline{\hspace{2cm}}$



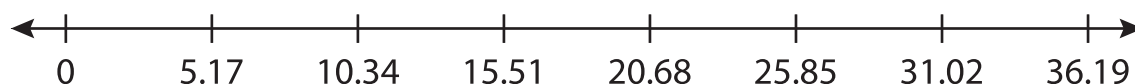
3) $1.64 \times 9 = \underline{\hspace{2cm}}$



4) $9.73 \times 1 = \underline{\hspace{2cm}}$



5) $5.17 \times 6 = \underline{\hspace{2cm}}$



6) $8.38 \times 4 = \underline{\hspace{2cm}}$

