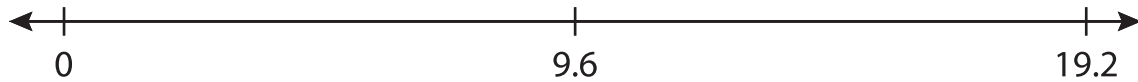


# Multiplying Decimals Using Number Lines

---

Draw hops on each number line and complete the multiplication sentence.

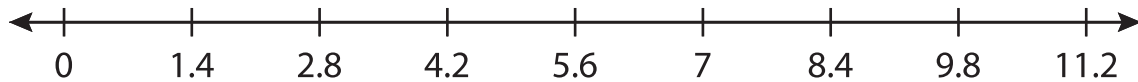
1)  $9.6 \times 1 = \underline{\hspace{2cm}}$



2)  $4.2 \times 7 = \underline{\hspace{2cm}}$



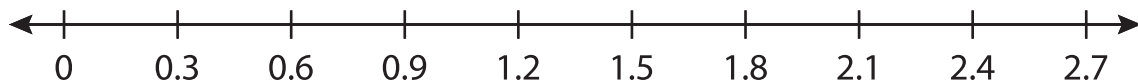
3)  $1.4 \times 5 = \underline{\hspace{2cm}}$



4)  $8.8 \times 3 = \underline{\hspace{2cm}}$



5)  $0.3 \times 9 = \underline{\hspace{2cm}}$



6)  $3.7 \times 5 = \underline{\hspace{2cm}}$

