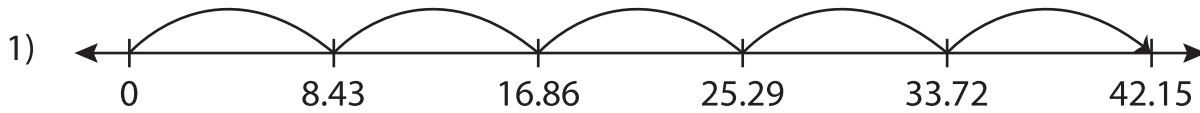


# Multiplying Decimals Using Number Lines

Complete the multiplication sentence that describes each model.



$$\underline{\hspace{2cm}} \times 5 = 42.15$$



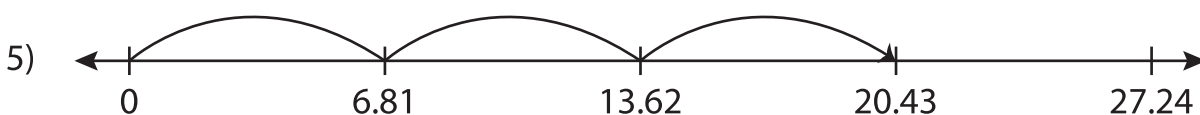
$$2.74 \times \underline{\hspace{2cm}} = 10.96$$



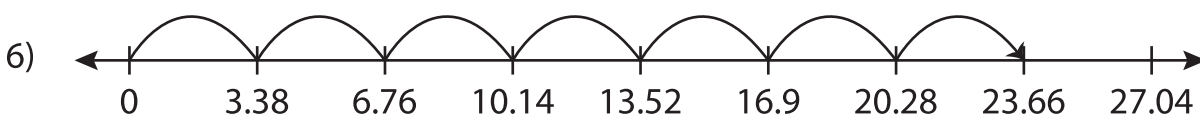
$$\underline{\hspace{2cm}} \times 6 = 7.62$$



$$7.95 \times \underline{\hspace{2cm}} = 15.9$$



$$\underline{\hspace{2cm}} \times 3 = 20.43$$



$$3.38 \times \underline{\hspace{2cm}} = 23.66$$