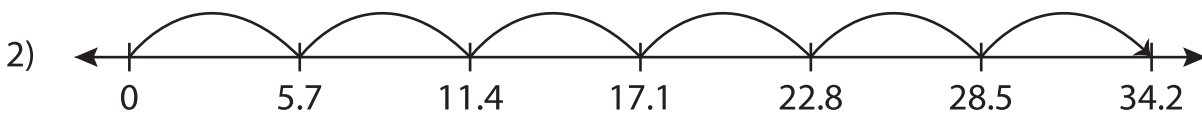


Multiplying Decimals Using Number Lines

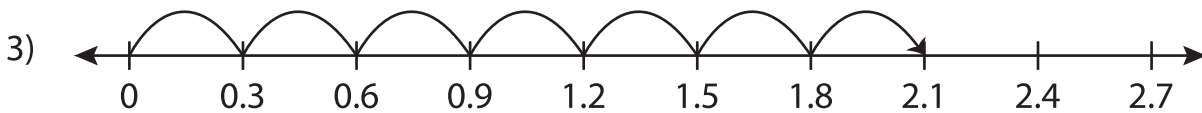
Complete the multiplication sentence that describes each model.



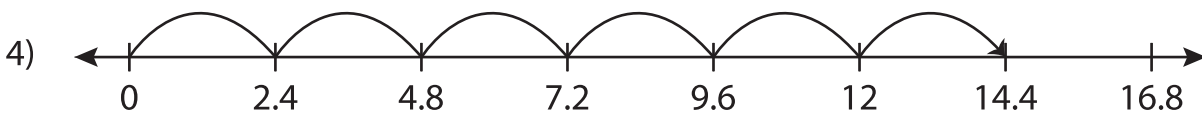
$$8.5 \times \underline{\quad} = 17$$



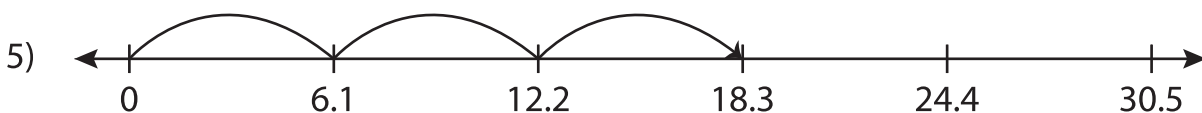
$$\underline{\quad} \times 6 = 34.2$$



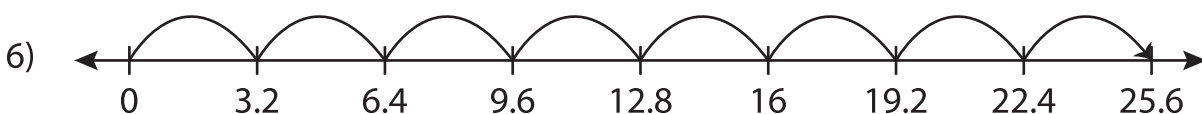
$$0.3 \times \underline{\quad} = 2.1$$



$$\underline{\quad} \times 6 = 14.4$$



$$6.1 \times \underline{\quad} = 18.3$$



$$\underline{\quad} \times 8 = 25.6$$