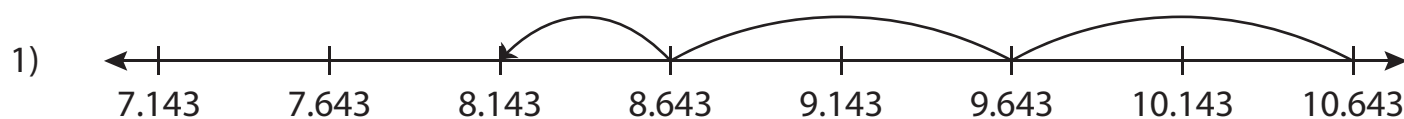


Subtracting Decimals Using Number Lines

Complete the subtraction sentence that describes each model.



$$\underline{\hspace{2cm}} - 2.5 = 8.143$$

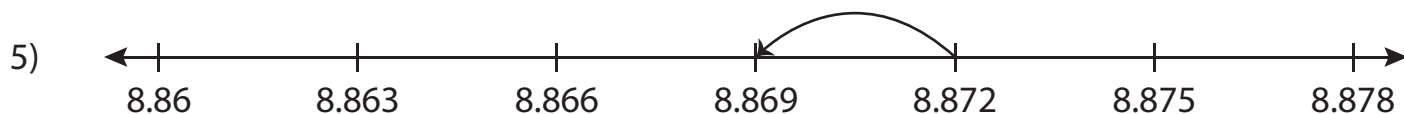


3) **Preview**

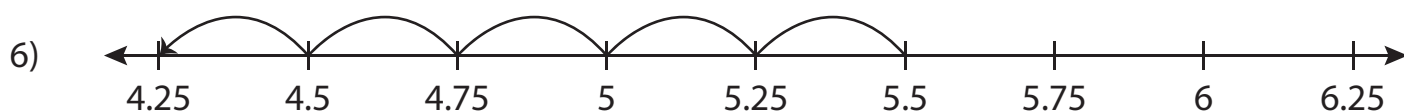
Become a member to unlock
unrestricted access to both printable
and online worksheets.



www.tutoringhour.com



$$\underline{\hspace{2cm}} - 0.003 = 8.869$$



$$\underline{\hspace{2cm}} - 1.25 = 4.25$$