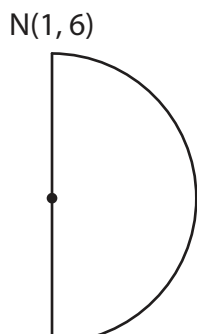



## Distance Formula | Finding the Side Lengths

1) Find the diameter of the semicircle.



2) Find the length of the side WX.



3)

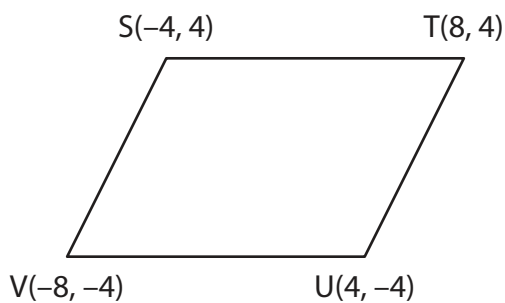
# Preview

Become a member to unlock  
unrestricted access to both printable  
and online worksheets.



[www.tutoringhour.com](http://www.tutoringhour.com)

5) Find the length of the side SV.



6) Find the length of the side FG.

