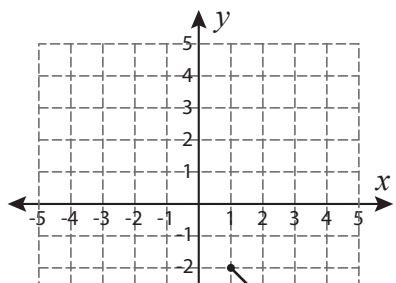


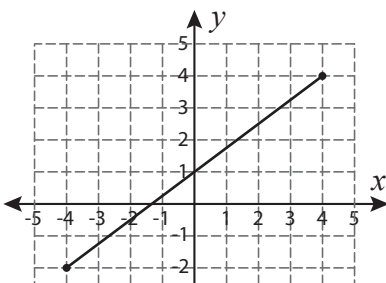
Length | Pythagorean Theorem

Find the length of each line segment using the Pythagorean theorem. Verify the answer using distance formula. Round the answer to the nearest tenth.

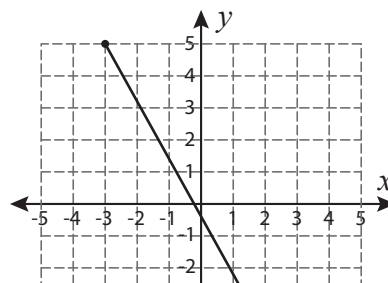
1)



2)



3)



4)

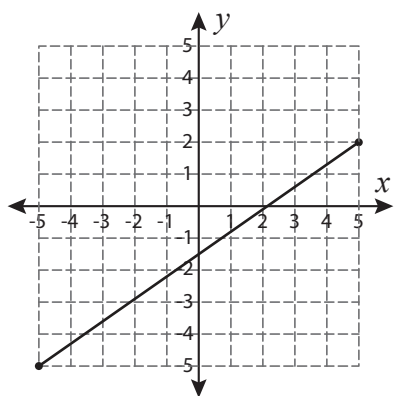
Preview

Become a member to unlock
unrestricted access to both printable
and online worksheets.

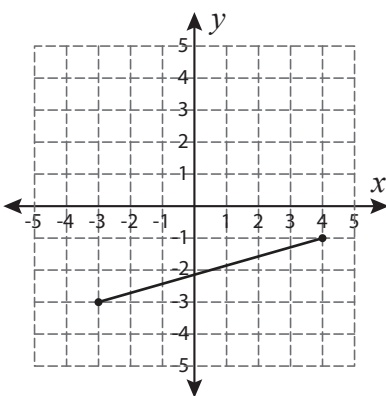


www.tutoringhour.com

7)



8)



9)

