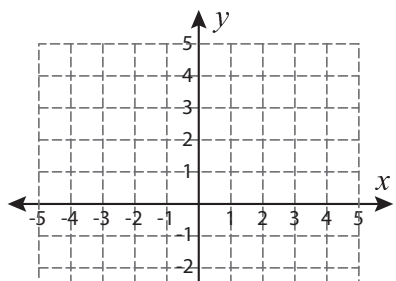


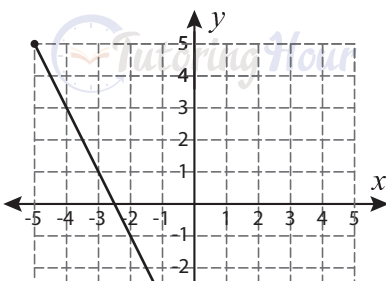
# Length | Pythagorean Theorem

Find the length of each line segment using the Pythagorean theorem. Verify the answer using distance formula. Round the answer to the nearest tenth.

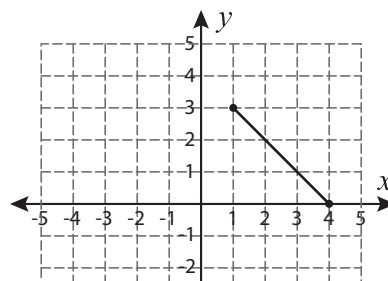
1)



2)



3)



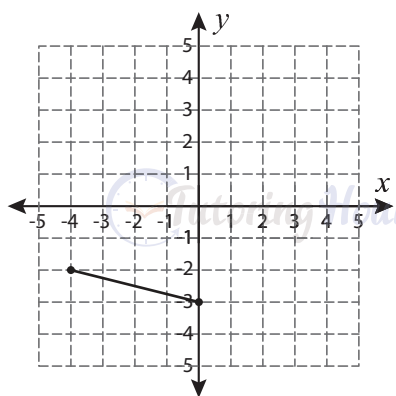
4)

Become a member to unlock  
unrestricted access to both printable  
and online worksheets.

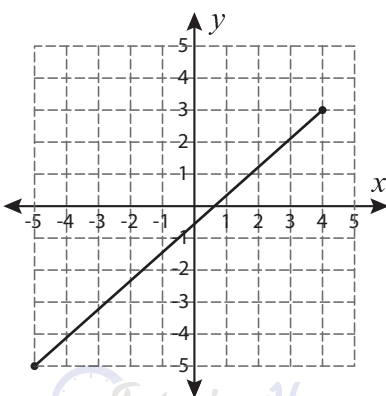


[www.tutoringhour.com](http://www.tutoringhour.com)

7)



8)



9)

