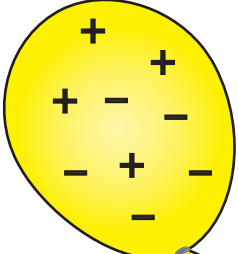



# Electric Charges

Count the number of charges and write if each object is positively charged, negatively charged, or neutral.

1)  Positive charges \_\_\_\_\_  
Negative charges \_\_\_\_\_

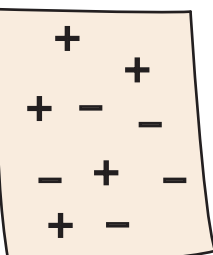
2)  Positive charges \_\_\_\_\_  
Negative charges \_\_\_\_\_

## Preview

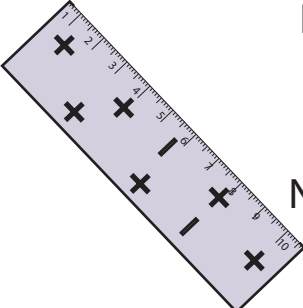
3) **Become a member to unlock  
unrestricted access to both printable  
and online worksheets.**



[www.tutoringhour.com](http://www.tutoringhour.com)

5)  Positive charges \_\_\_\_\_  
Negative charges \_\_\_\_\_

The paper is \_\_\_\_\_.

6)  Positive charges \_\_\_\_\_  
Negative charges \_\_\_\_\_

The ruler is \_\_\_\_\_.