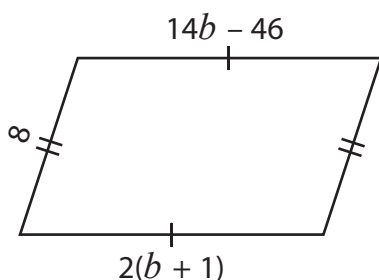


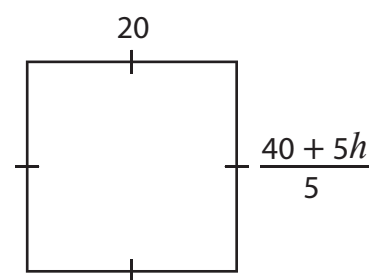
Multi-Step Equations

Find the values of the given variables.

1)



2)



3)

Preview

Become a member to unlock
unrestricted access to both printable
and online worksheets.



www.tutoringhour.com

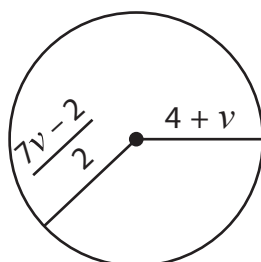
5)

$$16(4 - r)$$

$$r = \underline{\hspace{2cm}}$$

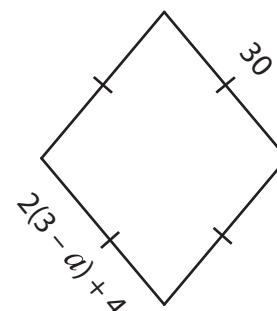
$$t = \underline{\hspace{2cm}}$$

7)



$$v = \underline{\hspace{2cm}}$$

8)



$$a = \underline{\hspace{2cm}}$$