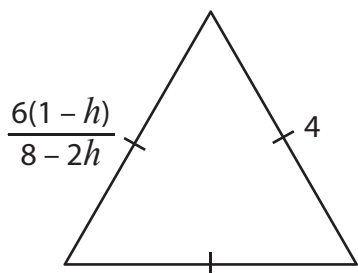


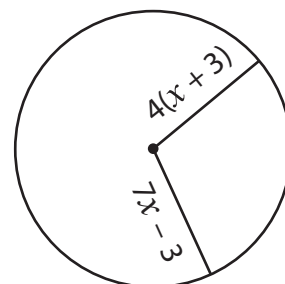
Multi-Step Equations

Find the values of the given variables.

1)



2)



3)

Preview

Become a member to unlock
unrestricted access to both printable
and online worksheets.



www.tutoringhour.com

5)

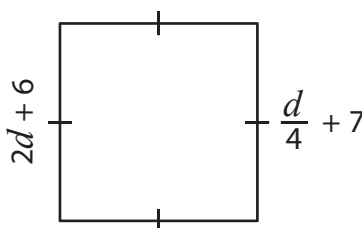
$$\frac{3(k+2)}{4}$$

$$k = \underline{\hspace{2cm}}$$

$$x+6$$

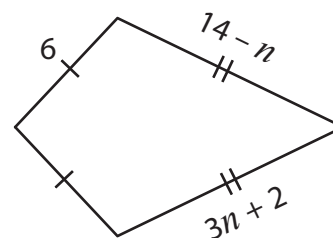
$$a = \underline{\hspace{2cm}}$$

7)



$$d = \underline{\hspace{2cm}}$$

8)



$$n = \underline{\hspace{2cm}}$$