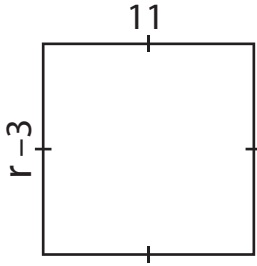


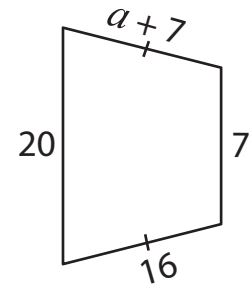
One-Step Equations | Addition and Subtraction

Find the values of the given variables.

1)



2)



3)

Preview

Become a member to unlock
unrestricted access to both printable
and online worksheets.



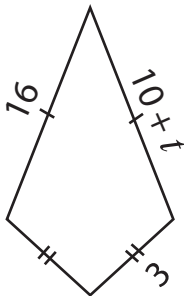
www.tutoringhour.com

5)

$h =$ _____

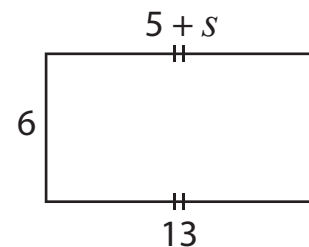
$c =$ _____

7)



$t =$ _____

8)



$s =$ _____