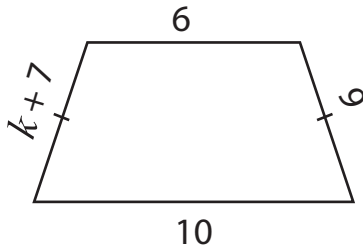


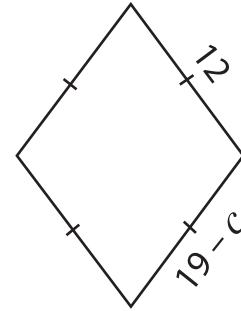
One-Step Equations | Addition and Subtraction

Find the values of the given variables.

1)



2)



3)

Preview

Become a member to unlock
unrestricted access to both printable
and online worksheets.

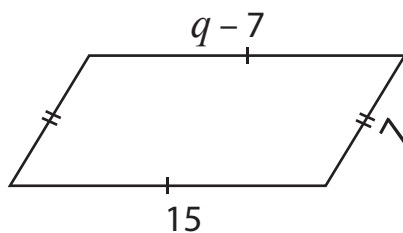


www.tutoringhour.com

5)

$u =$ _____

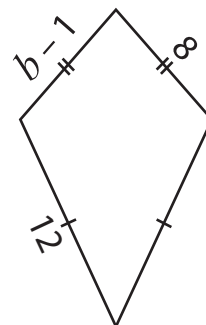
7)



$q =$ _____

$w =$ _____

8)



$b =$ _____