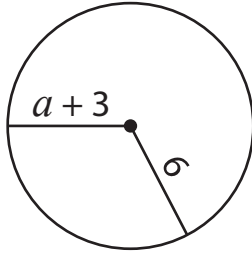


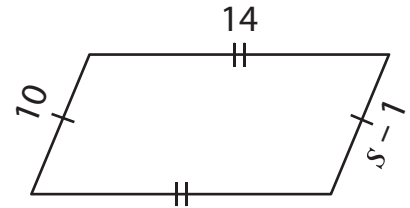
One-Step Equations | Addition and Subtraction

Find the values of the given variables.

1)



2)



3)

Preview

Become a member to unlock
unrestricted access to both printable
and online worksheets.



www.tutoringhour.com

5)

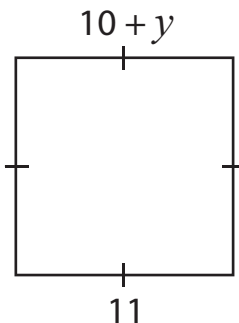
$$c + 9$$

$$6$$

$$c = \underline{\hspace{2cm}}$$

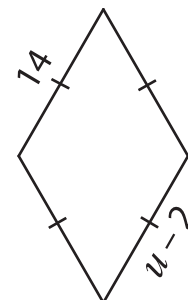
$$r = \underline{\hspace{2cm}}$$

7)



$$y = \underline{\hspace{2cm}}$$

8)



$$u = \underline{\hspace{2cm}}$$