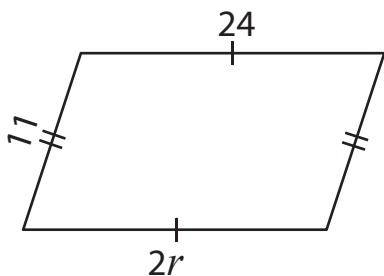


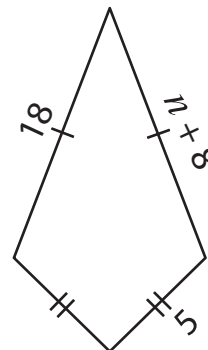
One-Step Equations

Find the values of the given variables.

1)



2)



3)

Preview

Become a member to unlock
unrestricted access to both printable
and online worksheets.



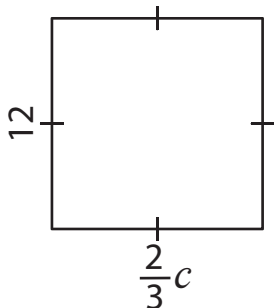
www.tutoringhour.com

5)

$b + 9$

$b =$ _____

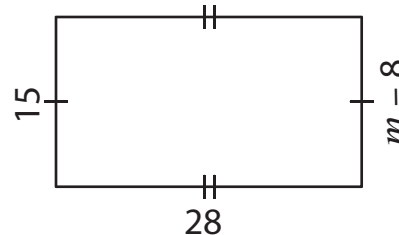
7)



$c =$ _____

$a =$ _____

8)



$m =$ _____