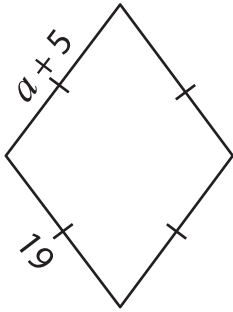


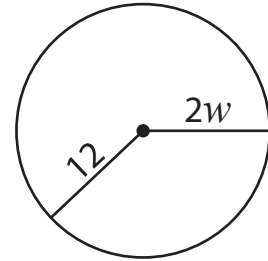
One-Step Equations

Find the values of the given variables.

1)



2)



3)

Preview

Become a member to unlock
unrestricted access to both printable
and online worksheets.



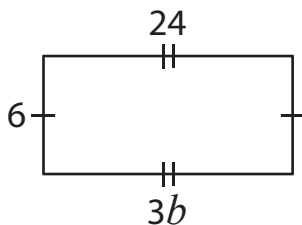
www.tutoringhour.com

5)

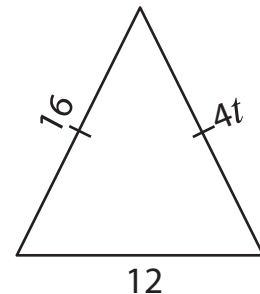
$d =$ _____

$u =$ _____

7)



8)



$b =$ _____

$t =$ _____