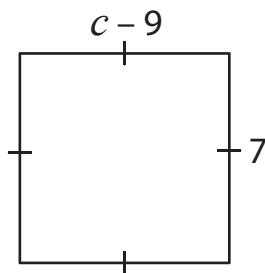


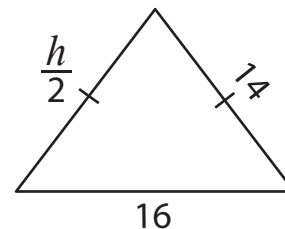
One-Step Equations

Find the values of the given variables.

1)



2)



3)

Preview

Become a member to unlock
unrestricted access to both printable
and online worksheets.



www.tutoringhour.com

5)

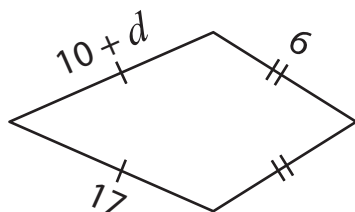


17

$z =$ _____

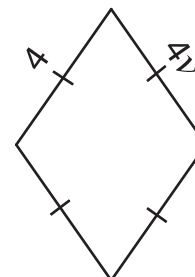
$k =$ _____

7)



$d =$ _____

8)



$v =$ _____