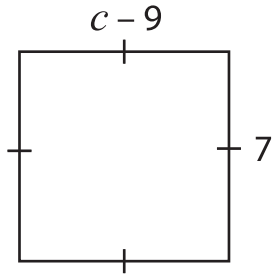


# One-Step Equations

---

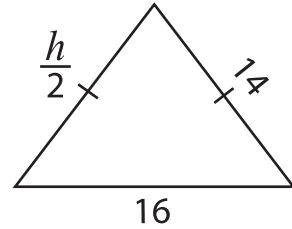
Find the values of the given variables.

1)



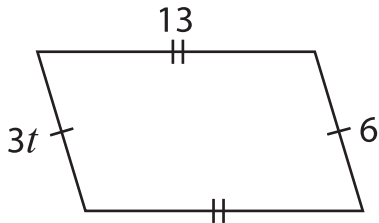
$c =$  \_\_\_\_\_

2)



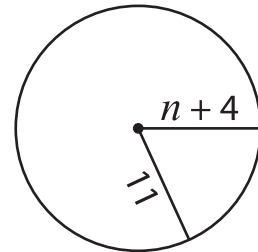
$h =$  \_\_\_\_\_

3)



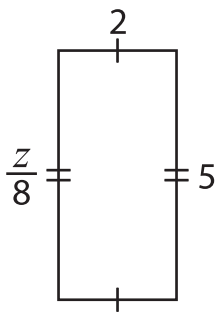
$t =$  \_\_\_\_\_

4)



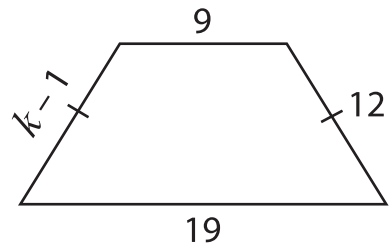
$n =$  \_\_\_\_\_

5)



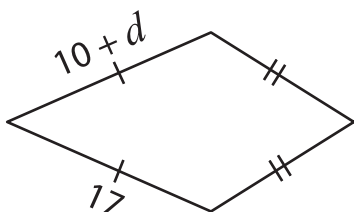
$z =$  \_\_\_\_\_

6)



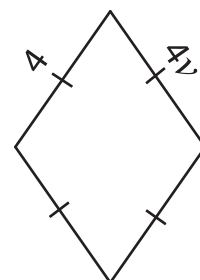
$k =$  \_\_\_\_\_

7)



$d =$  \_\_\_\_\_

8)



$v =$  \_\_\_\_\_