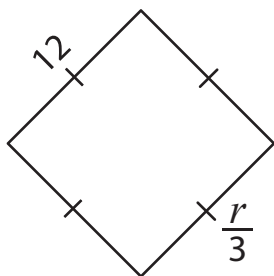


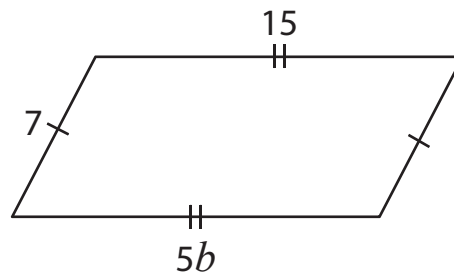
One-Step Equations | Multiplication and Division

Find the values of the given variables.

1)



2)



3)

Preview

Become a member to unlock
unrestricted access to both printable
and online worksheets.

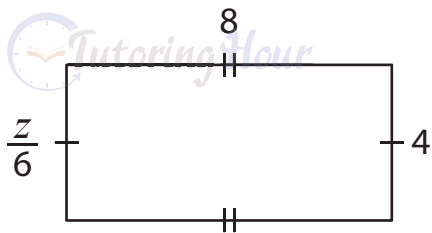
www.tutoringhour.com

5)

$a =$ _____

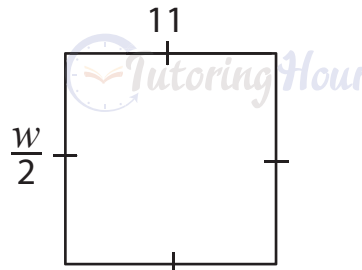
$c =$ _____

7)



$z =$ _____

8)



$w =$ _____