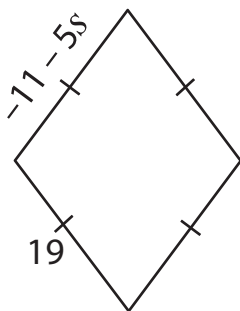


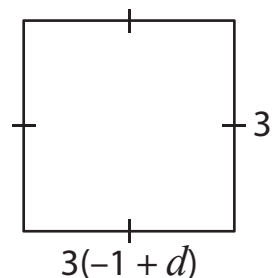
Two-Step Equations | Shapes

Find the values of the given variables.

1)



2)



3)

Preview

Become a member to unlock
unrestricted access to both printable
and online worksheets.



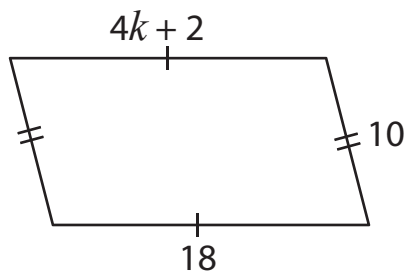
www.tutoringhour.com

5)

$$a = \underline{\hspace{2cm}}$$

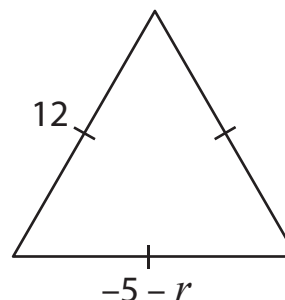
$$t = \underline{\hspace{2cm}}$$

7)



$$k = \underline{\hspace{2cm}}$$

8)



$$r = \underline{\hspace{2cm}}$$