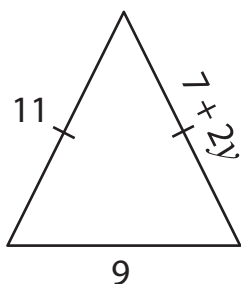


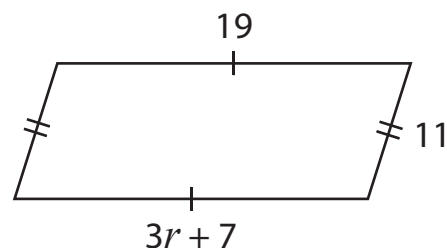
# Two-Step Equations | Shapes

Find the values of the given variables.

1)



2)



3)

# Preview

Become a member to unlock  
unrestricted access to both printable  
and online worksheets.



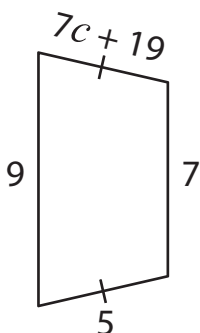
[www.tutoringhour.com](http://www.tutoringhour.com)

5)

$$d = \underline{\hspace{2cm}}$$

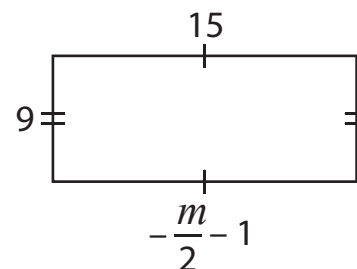
$$a = \underline{\hspace{2cm}}$$

7)



$$c = \underline{\hspace{2cm}}$$

8)



$$m = \underline{\hspace{2cm}}$$