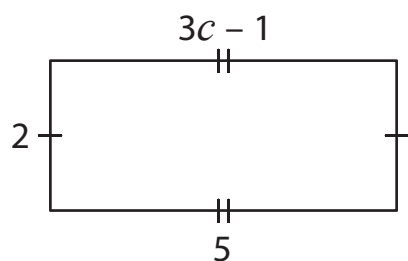


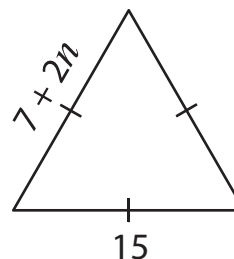
Two-Step Equations | Shapes

Find the values of the given variables.

1)



2)



3)

Preview

Become a member to unlock
unrestricted access to both printable
and online worksheets.



www.tutoringhour.com

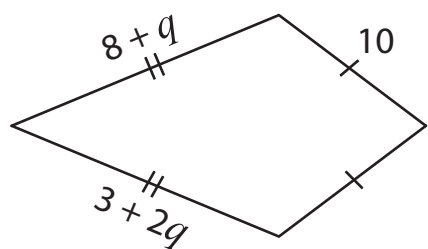
5)

19

$$z = \underline{\hspace{2cm}}$$

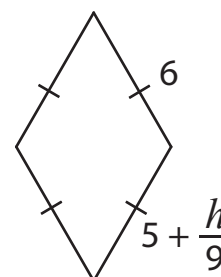
$$x = \underline{\hspace{2cm}}$$

7)



$$q = \underline{\hspace{2cm}}$$

8)



$$h = \underline{\hspace{2cm}}$$