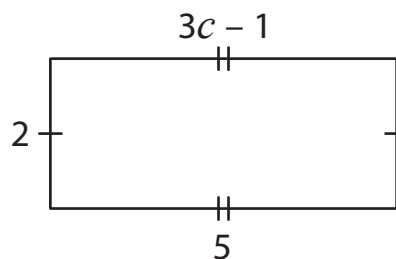


Two-Step Equations | Shapes

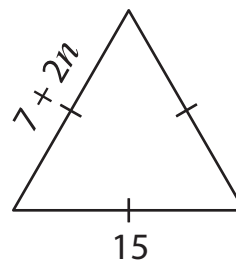
Find the values of the given variables.

1)



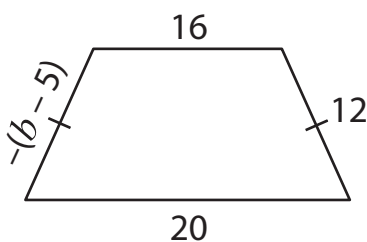
$$c = \underline{\hspace{2cm}}$$

2)



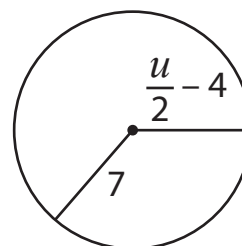
$$n = \underline{\hspace{2cm}}$$

3)



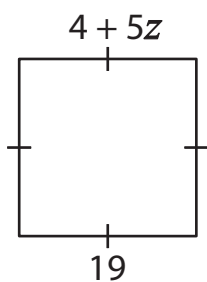
$$b = \underline{\hspace{2cm}}$$

4)



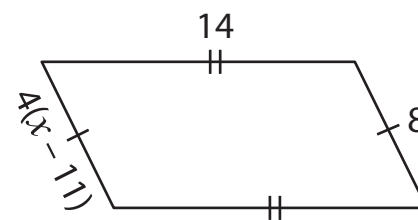
$$u = \underline{\hspace{2cm}}$$

5)



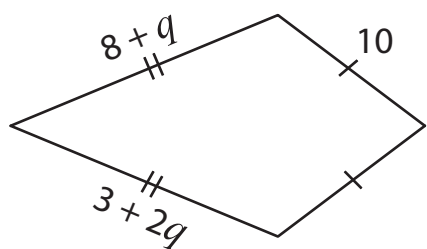
$$z = \underline{\hspace{2cm}}$$

6)



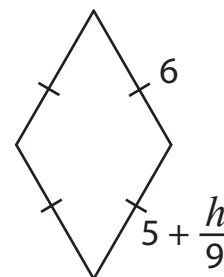
$$x = \underline{\hspace{2cm}}$$

7)



$$q = \underline{\hspace{2cm}}$$

8)



$$h = \underline{\hspace{2cm}}$$