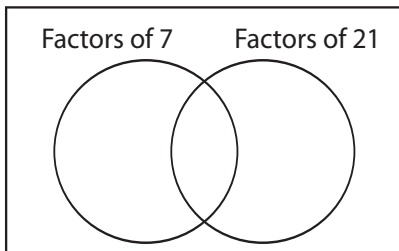


Greatest Common Factor Using Venn Diagrams

Find the greatest common factor of each pair of numbers using the Venn diagram.

1) 7, 21

a) Complete the Venn diagram.

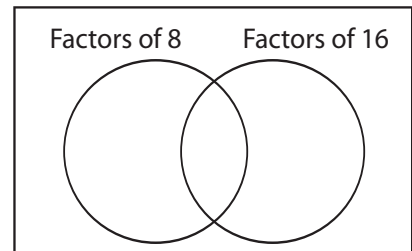


b) Common factors: _____

c) GCF (7, 21) = _____

2) 8, 16

a) Complete the Venn diagram.

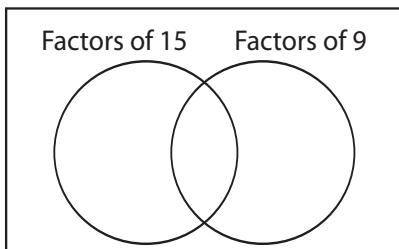


b) Common factors: _____

c) GCF (8, 16) = _____

3) 15, 9

a) Complete the Venn diagram.

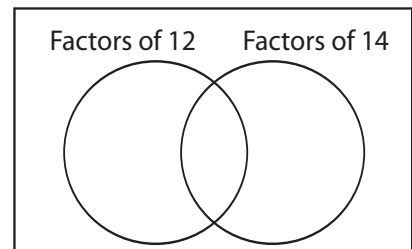


b) Common factors: _____

c) GCF (15, 9) = _____

4) 12, 14

a) Complete the Venn diagram.

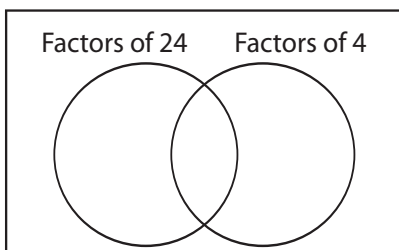


b) Common factors: _____

c) GCF (12, 14) = _____

5) 24, 4

a) Complete the Venn diagram.

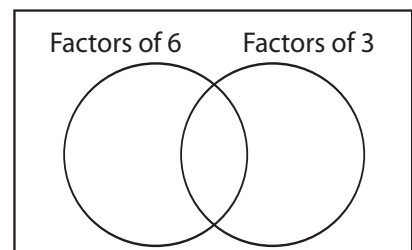


b) Common factors: _____

c) GCF (24, 4) = _____

6) 6, 3

a) Complete the Venn diagram.



b) Common factors: _____

c) GCF (6, 3) = _____