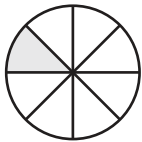
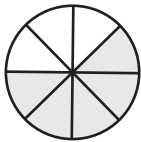
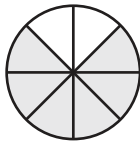
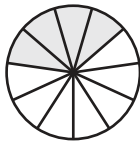
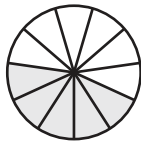
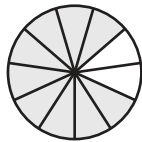


Adding Fractions Using Visual Models

A) Observe each fraction model and complete the addition equation.

1)  +  = 

$$\frac{1}{8} + \frac{5}{8} = \boxed{}$$

2)  +  = 

$$\frac{4}{11} + \frac{5}{11} = \boxed{}$$

3)

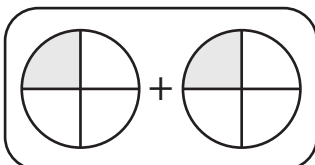
Preview

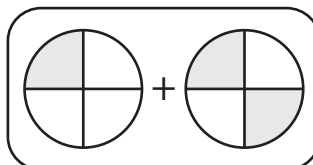
Become a member to unlock
unrestricted access to both printable
and online worksheets.

5)

www.tutoringhour.com

B) Which of the following models represents a pair of fractions that sum up to $\frac{2}{4}$?

a) 

b) 

c) 