




Making a Whole

Observe each fraction model and complete the addition equation to make a whole.

1)  +  = 

2)  +  = 

$\frac{4}{5} + \boxed{} = 1$

$\frac{7}{8} + \boxed{} = 1$

3)  




Preview




Become a member to unlock
unrestricted access to both printable
and online worksheets.

5)  

$\frac{3}{6} + \boxed{} = 1$

$\boxed{} + \frac{3}{4} = 1$

7)  +  = 

8)  +  = 

$\boxed{} + \frac{5}{12} = 1$

$\frac{1}{18} + \boxed{} = 1$