


Making a Whole

1) $\frac{4}{8}$ and _____ make a whole 


2) $\frac{13}{20}$ and _____ make a whole 


3) _____ and $\frac{7}{16}$ make a whole 

4) _____ and $\frac{6}{10}$ make a whole 

5) $\frac{3}{6}$ and _____ make a whole 


6) $\frac{3}{4}$ and _____ make a whole 

7) _____ and $\frac{5}{12}$ make a whole 

8) _____ and $\frac{7}{18}$ make a whole 

9) $\frac{1}{5}$ and _____ make a whole 

10) $\frac{3}{13}$ and _____ make a whole 

11) _____ and $\frac{2}{9}$ make a whole 

12) _____ and $\frac{2}{7}$ make a whole 