

Making a Whole

Observe each fraction model and complete the addition equation to make a whole.

1)  +  = 

2)  +  = 

$\frac{1}{2}$ +  = 1  + $\frac{4}{8}$ = 1


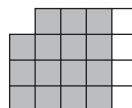
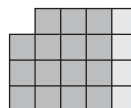
3)  

Preview
 Become a member to unlock
 unrestricted access to both printable
 and online worksheets.

5) 

www.tutoringhour.com

 + $\frac{8}{14}$ = 1 $\frac{8}{18}$ +  = 1

7)  +  = 

8)  +  = 

$\frac{4}{19}$ +  = 1  + $\frac{2}{4}$ = 1