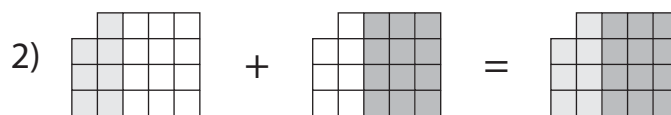
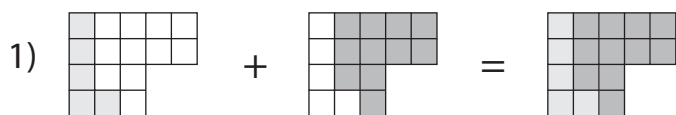


# Making a Whole

Observe each fraction model and complete the addition equation to make a whole.



3)  +  $\frac{11}{22} = 1$        +  $\frac{12}{22} = 1$

3)

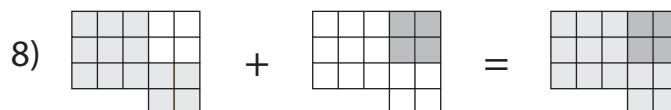
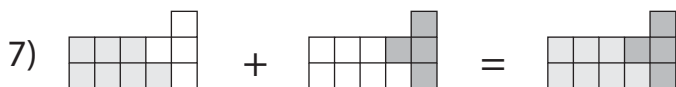
# Preview

Become a member to unlock  
unrestricted access to both printable  
and online worksheets.

5)

www.tutoringhour.com

+  $\frac{1}{15} = 1$        $\frac{5}{14} +$   = 1



$\frac{7}{11} +$   = 1

+  $\frac{4}{17} = 1$