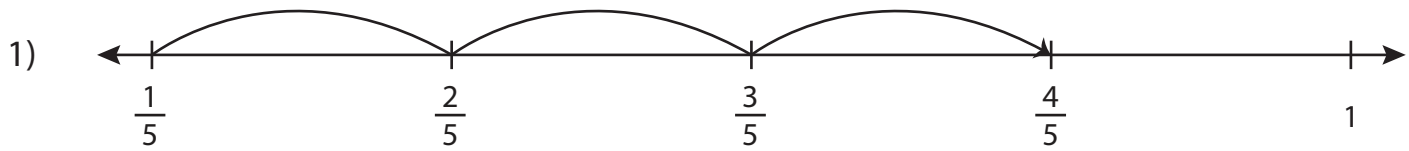


Adding Fractions on a Number Line

Complete the addition sentence that describes each model.



$$\frac{1}{5} + \underline{\hspace{2cm}} = \frac{4}{5}$$

2)

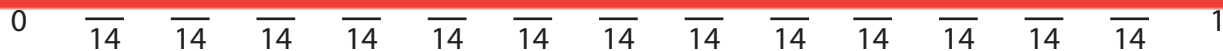
Preview

Become a member to unlock
unrestricted access to both printable
and online worksheets.



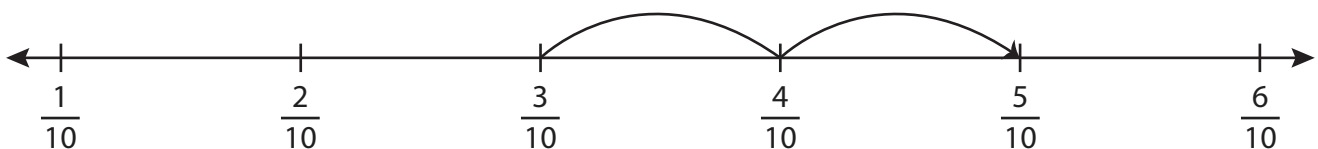
www.tutoringhour.com

4)



$$\underline{\hspace{2cm}} + \frac{12}{14} = \frac{13}{14}$$

5)



$$\frac{3}{10} + \underline{\hspace{2cm}} = \frac{5}{10}$$