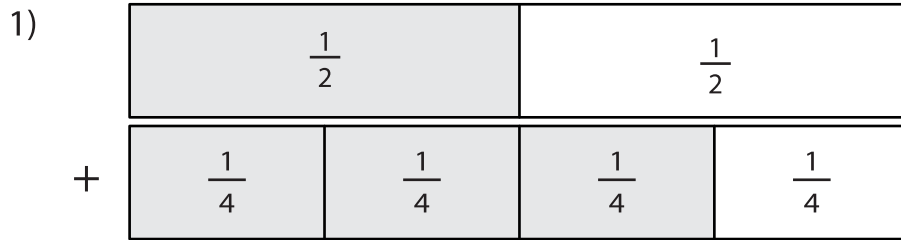
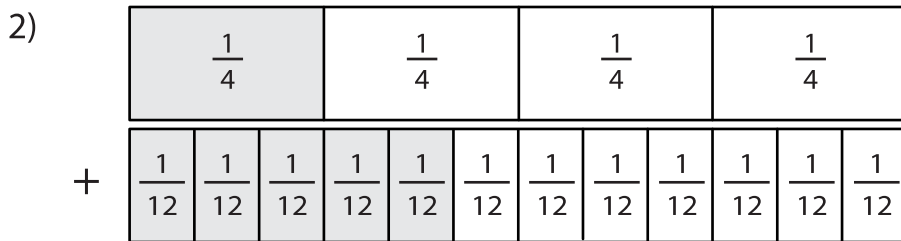


Adding Fractions Using Visual Models

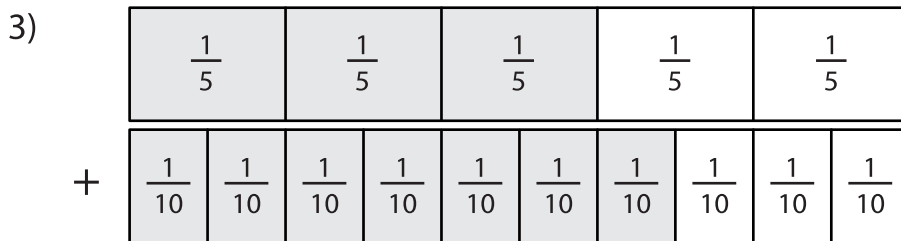
Observe the fraction models and complete the addition equations.



$$\frac{1}{2} + \frac{3}{4} = \boxed{}$$



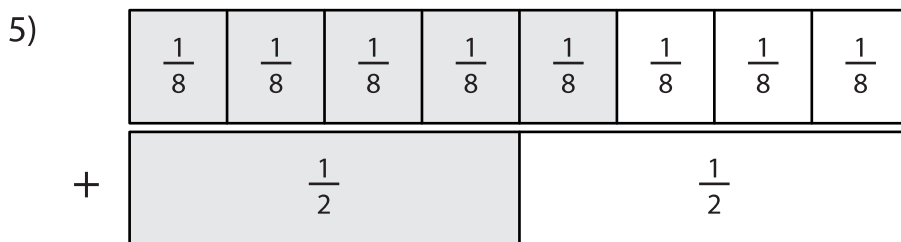
$$\frac{1}{4} + \frac{5}{12} = \boxed{}$$



$$\frac{3}{5} + \frac{7}{10} = \boxed{}$$



$$\frac{2}{3} + \frac{4}{9} = \boxed{}$$



$$\frac{5}{8} + \frac{1}{2} = \boxed{}$$