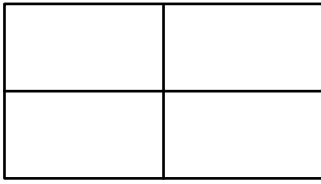


# Coloring Halves, Thirds, and Fourths


---

A) Color a portion of each shape to correctly represent the specified fraction.

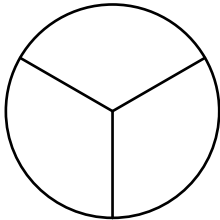
1)  $\frac{3}{4}$



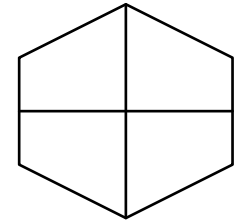
2)  $\frac{1}{2}$



3)  $\frac{2}{3}$

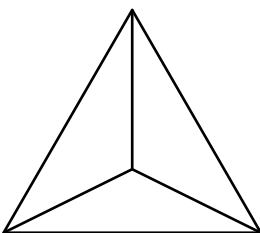


4)  $\frac{1}{4}$



B) Color a portion of each shape according to the fraction specified in words.

1) One-third



2) Two-fourths

