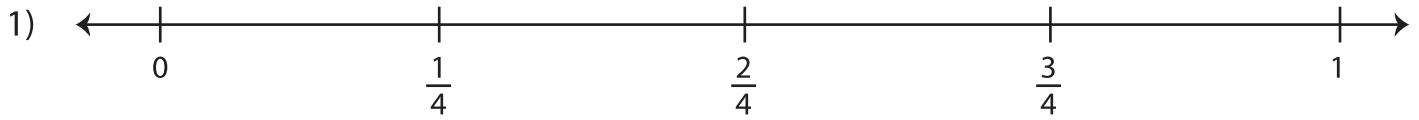



## Comparing Fractions Using Number Lines

Locate each pair of fractions on the number lines, and compare them using  $>$ ,  $<$ , or  $=$ .



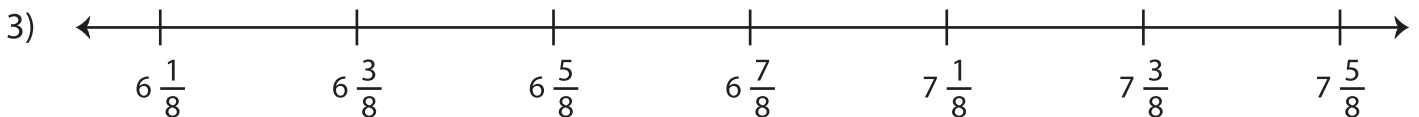
i)  $\frac{3}{4}$    $\frac{1}{4}$

ii)  $\frac{2}{4}$    $\frac{3}{4}$



i)  $\frac{8}{7}$    $\frac{8}{7}$

ii)  $\frac{11}{7}$    $\frac{9}{7}$



i)  $6\frac{2}{8}$    $6\frac{5}{8}$

ii)  $7\frac{1}{8}$    $7\frac{1}{8}$



i)  $\frac{4}{9}$    $\frac{7}{9}$

ii)  $\frac{10}{9}$    $\frac{6}{9}$