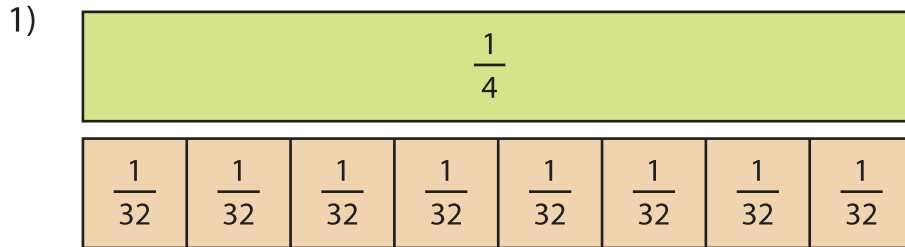
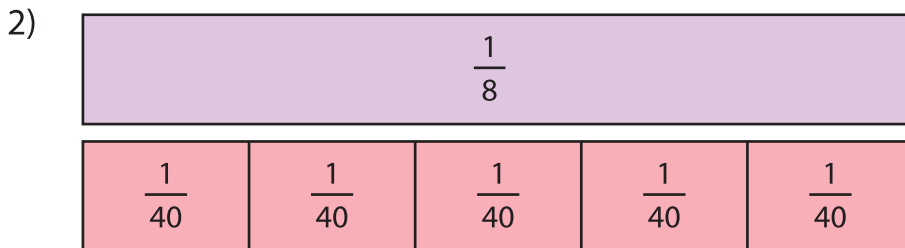


## Dividing Fractions | Visual Models

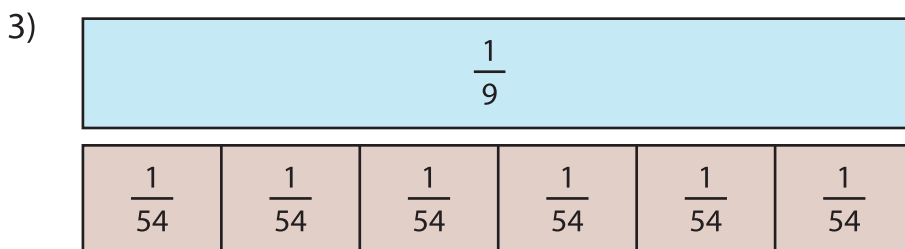
Divide the unit fractions by whole numbers using the models given.



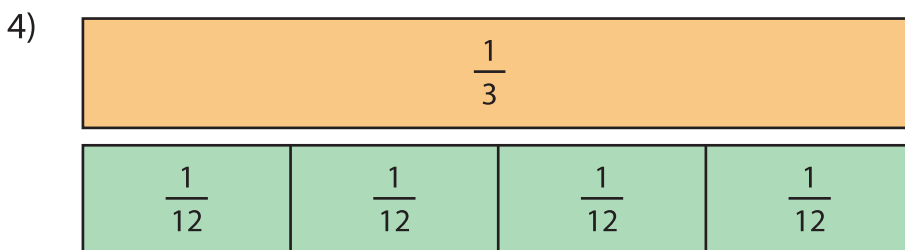
$$\frac{1}{4} \div 8 = \boxed{\phantom{000}}$$



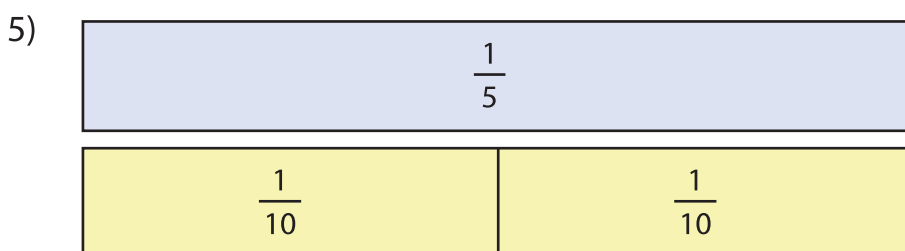
$$\frac{1}{8} \div 5 = \boxed{\phantom{000}}$$



$$\frac{1}{9} \div 6 = \boxed{\phantom{000}}$$



$$\frac{1}{3} \div 4 = \boxed{\phantom{000}}$$



$$\frac{1}{5} \div 2 = \boxed{\phantom{000}}$$