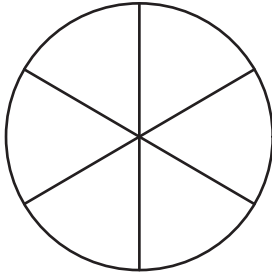


Equal Parts

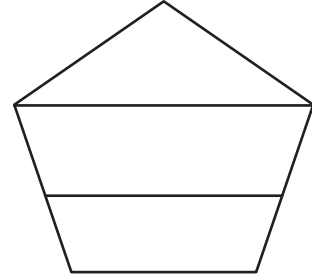
A) Determine if each given shape is divided into equal or unequal parts and check the appropriate option.

1)



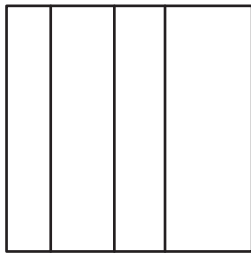
- ☐ Equal
☐ Unequal

2)




- ☐ Equal
☐ Unequal

3)



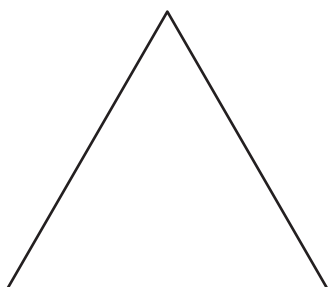
- ☐ Equal
☐ Unequal

4)



- ☐ Equal
☐ Unequal

B) 1) Divide the triangle into three equal parts.



2) Divide the oval into four equal parts.

