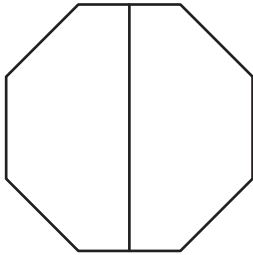


Equal Parts

A) Determine if each given shape is divided into equal or unequal parts and check the appropriate option.

1)



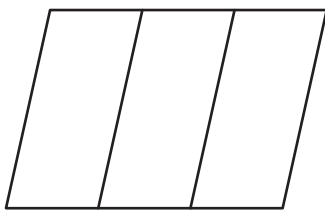
- ☐ Equal
☐ Unequal

2)



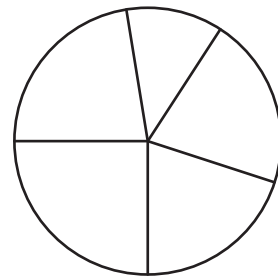
- ☐ Equal
☐ Unequal

3)



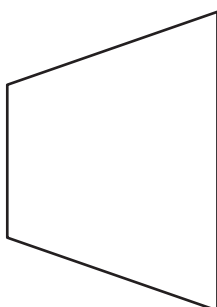
- ☐ Equal
☐ Unequal

4)



- ☐ Equal
☐ Unequal

B) 1) Divide the trapezoid into two equal parts.



2) Divide the rhombus into four equal parts.

