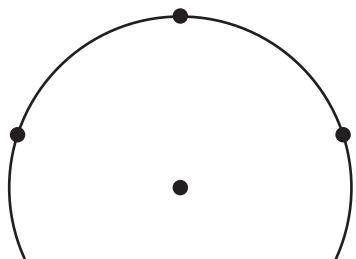
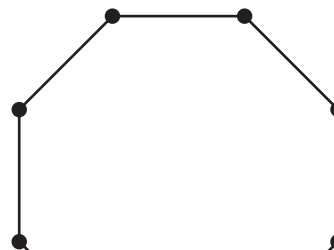


Partitioning Shapes into Equal Areas

1) a) Partition the circle into 5 equal areas.



2) a) Partition the octagon into 8 equal areas.



Preview

**Become a member to unlock
unrestricted access to both printable
and online worksheets.**

www.tutoringhour.com

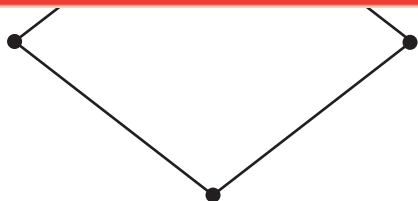


b)

nit

3) a)

qual



b) Express the area of each part as a unit fraction of the whole.



b) Express the area of each part as a unit fraction of the whole.
