

Halves, Thirds, and Fourths

A) Look at each model, and choose “halves”, “thirds”, or “fourths”.

1)




a) thirds

b) halves

c) fourths

2)




a) fourths

b) thirds

c) halves

3)



a) halves

b) fourths


c) thirds

B) 1) Which shape shows halves?

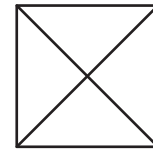
a)



b)

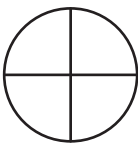


c)




2) Which shape shows thirds?


a)



b)

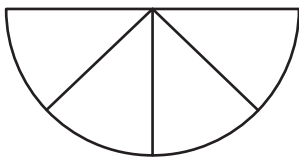


c)

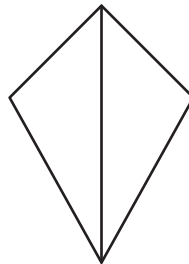


C) Write whether each of the following shapes is divided into halves, thirds, or fourths.

1)



2)



3)

