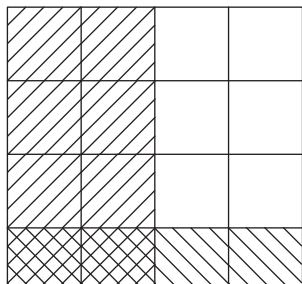


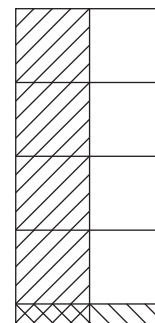
Multiplying Fractions | Area Model

Find the product using the area model.

1)



2)



3)

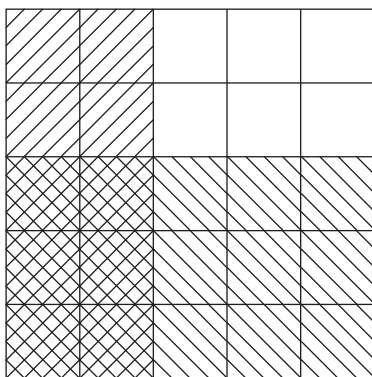
Preview

Become a member to unlock
unrestricted access to both printable
and online worksheets.

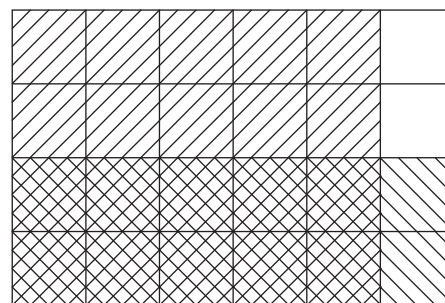


www.tutoringhour.com

5)



6)



$$\frac{2}{5} \times \frac{3}{5} = \underline{\hspace{2cm}}$$

$$\frac{5}{6} \times \frac{2}{4} = \underline{\hspace{2cm}}$$