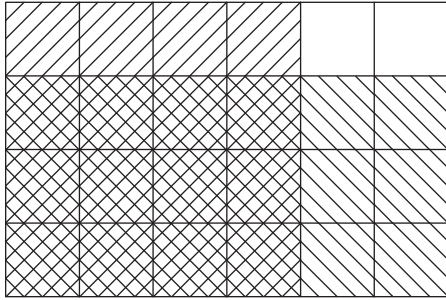


Multiplying Fractions | Area Model

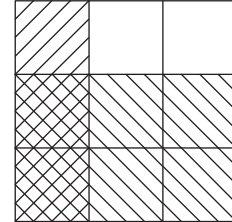
Find the product using the area model.

1)



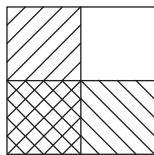
$$\frac{4}{6} \times \frac{3}{4} = \underline{\hspace{2cm}}$$

2)



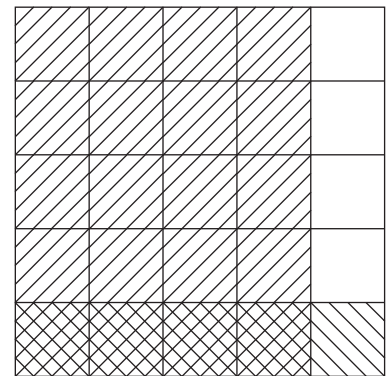
$$\frac{1}{3} \times \frac{2}{3} = \underline{\hspace{2cm}}$$

3)



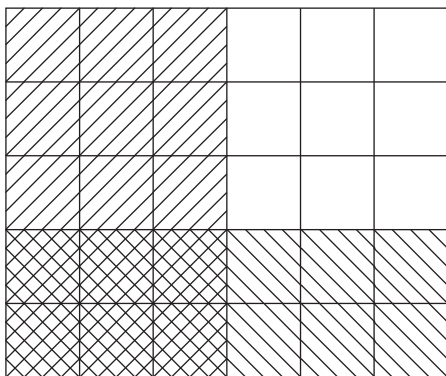
$$\frac{1}{2} \times \frac{1}{2} = \underline{\hspace{2cm}}$$

4)



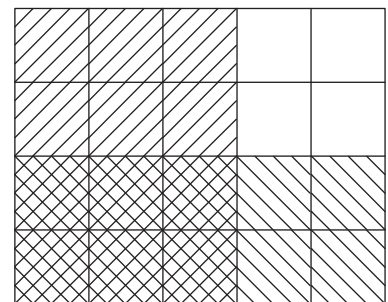
$$\frac{4}{5} \times \frac{1}{5} = \underline{\hspace{2cm}}$$

5)



$$\frac{3}{6} \times \frac{2}{5} = \underline{\hspace{2cm}}$$

6)



$$\frac{3}{5} \times \frac{2}{4} = \underline{\hspace{2cm}}$$