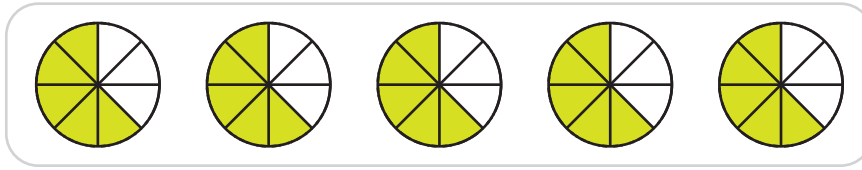


Multiplying Fractions | Models

A) 1)

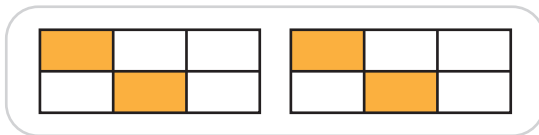


a) How many $\frac{1}{8}$ parts in the model above are shaded?

$$5 \times \frac{5}{8} = \underline{\hspace{2cm}} \times \frac{1}{8}$$

b) $5 \times \frac{5}{8} = \underline{\hspace{2cm}}$

2)

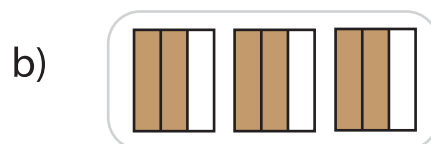
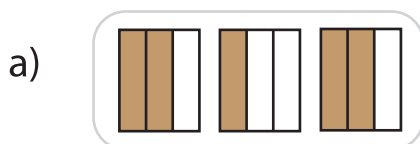


a) How many $\frac{1}{6}$ parts in the model above are shaded?

$$2 \times \frac{2}{6} = \underline{\hspace{2cm}} \times \frac{1}{6}$$

b) $2 \times \frac{2}{6} = \underline{\hspace{2cm}}$

B) 1) Which model represents the product $3 \times \frac{2}{3}$?



2) Which model represents the product $6 \times \frac{3}{5}$?

