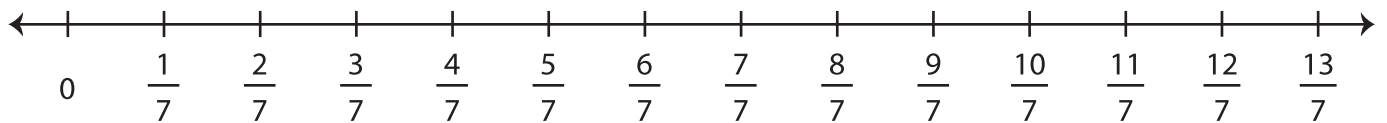


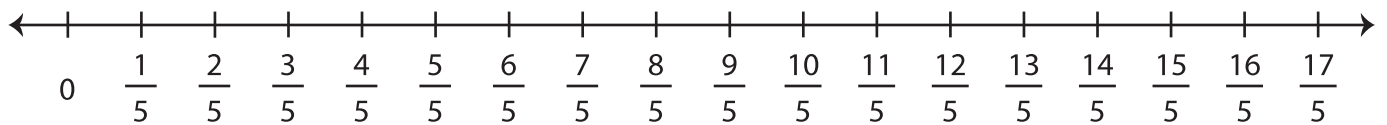
Multiplying Fractions | Number Line

Draw hops on the number line, and complete each multiplication equation.

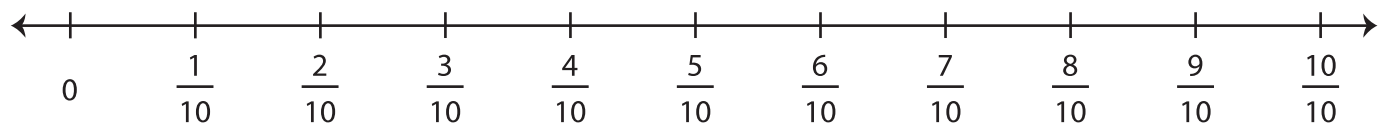
1) $2 \times \frac{5}{7} =$ _____



2) $5 \times \frac{3}{5} =$ _____



3) $3 \times \frac{1}{10} =$ _____



4) $7 \times \frac{2}{3} =$ _____

