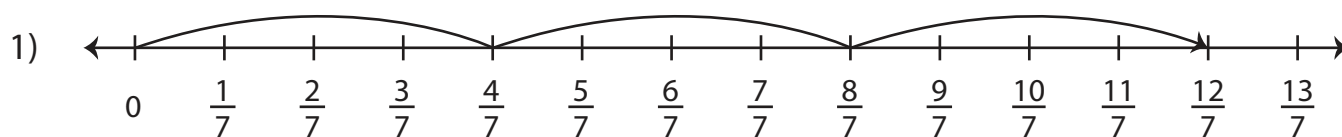


Multiplying Fractions on a Number Line

Complete each multiplication sentence using the number line.



$$3 \times \frac{4}{7} = \underline{\hspace{2cm}}$$

2)

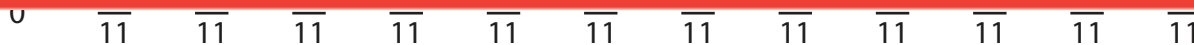
Preview

Become a member to unlock
unrestricted access to both printable
and online worksheets.



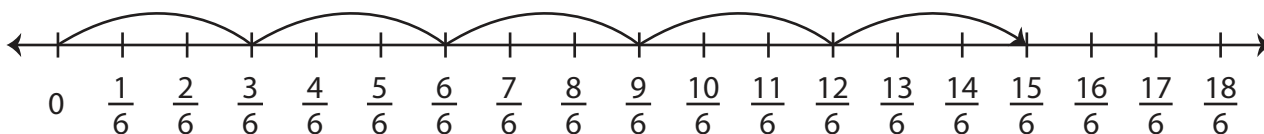
www.tutoringhour.com

4)



$$4 \times \frac{2}{11} = \underline{\hspace{2cm}}$$

5)



$$5 \times \frac{3}{6} = \underline{\hspace{2cm}}$$