


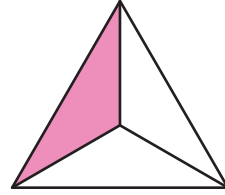
Identifying Thirds

A) Write what part of each shape is shaded.

1)

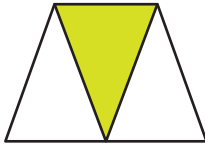


2)

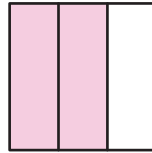


B) 1) Which of the following models does not represent two-thirds?


a)



b)

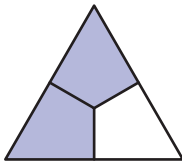


c)

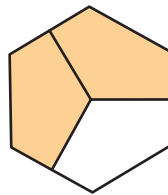


2) Which of the following models represents one-third?

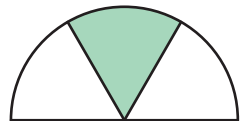
a)



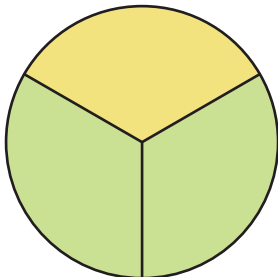
b)



c)



C)



1) What part of the circle is yellow?

2) What part of the circle is green?

3) How many thirds make a whole?