


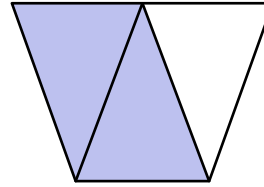
Identifying Thirds

A) Write what fraction of each shape is shaded.

1)

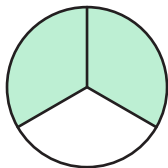


2)



B) 1) Which of the following models represents the fraction $\frac{1}{3}$?


a)



b)




c)

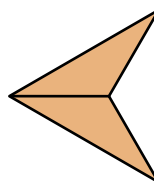


2) Which of the following models does not represent the fraction $\frac{2}{3}$?

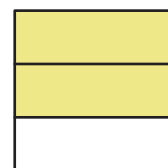
a)



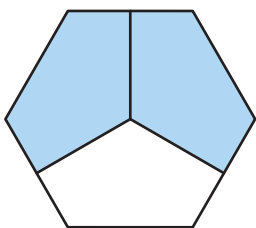
b)



c)



C)



1) How many thirds make a whole?

2) What fraction of the hexagon is left unshaded?

3) What fraction of the circle is blue?